

I have \_\_\_\_\_.

Who has



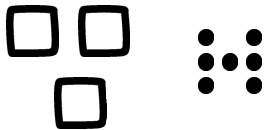
I have 37.

Who has



I have 73.

Who has



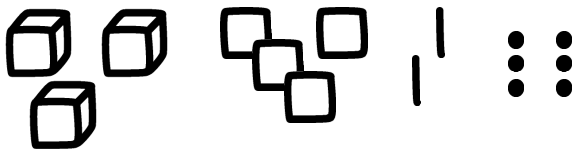
I have 307.

Who has



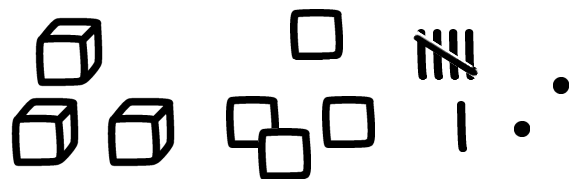
I have 370.

Who has



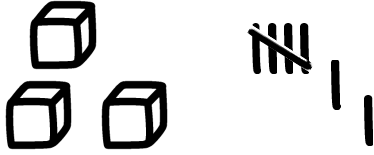
I have  $3.4 \times 10^3$ .

Who has



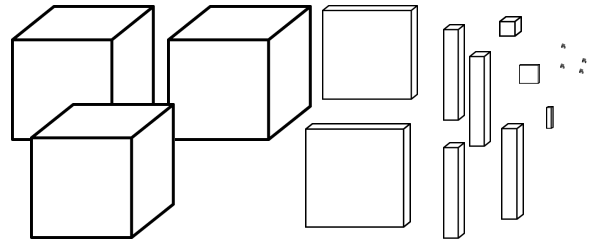
I have  $3.5 \times 10^3$ .

Who has



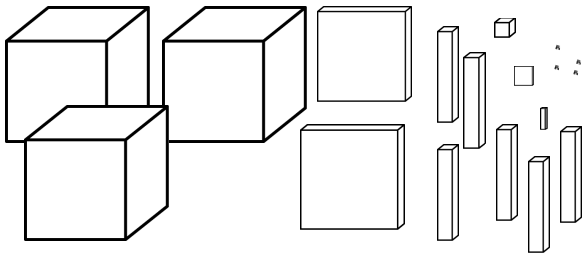
I have  $3.1 \times 10^3$ .

Who has



I have  $3.24 \times 10^6$ .

Who has



I have  $3.3 \times 10^6$ .

Who has




I have 39.

Who has




I have 41.

Who has



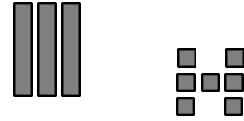
I have 219.

Who has



I have 221.

Who has



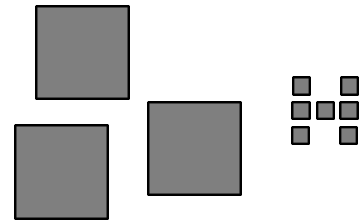
I have  $3x + 7$ .

Who has



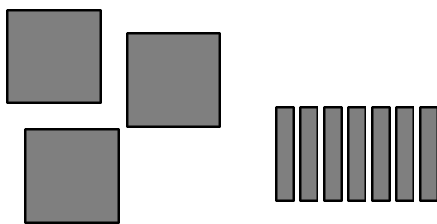
I have  $7x + 3$ .

Who has



I have  $3x^2 + 7$ .

Who has



I have  $3x^2 + 7x$ .

Who has

